

EXTRA MATHEMATICS ADMISSIONS TEST

December 2022

Time allowed: 1 hour

Surname	
Other names	

This paper contains 10 multiple choice questions.

Calculators are not permitted.

For each question on pages 2–11 you will be given **five** possible answers, just one of which is correct. Indicate for each question **A–J** which answer (a), (b), (c), (d), or (e) you think is correct with a tick (✓) in the corresponding column in the table below.

	(a)	(b)	(c)	(d)	(e)
A					
B					
C					
D					
E					
F					
G					
H					
I					
J					

A. Whenever I toss a particular coin, it lands on heads with probability $\cos^2 \alpha$ for some fixed real number α (and the outcome is independent of other tosses). I toss the coin three times. The probability that the coin lands on heads two or more times is equal to

(a) $1 + 3 \sin^4 \alpha - 2 \sin^6 \alpha$,

(b) $1 - 3 \sin^4 \alpha - 2 \sin^6 \alpha$,

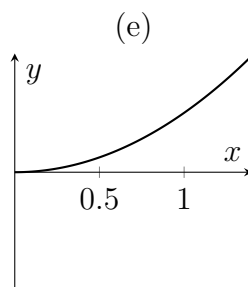
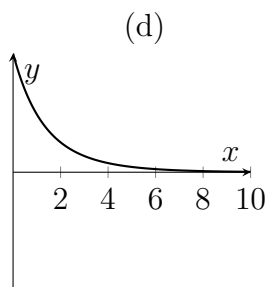
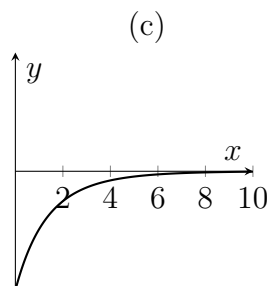
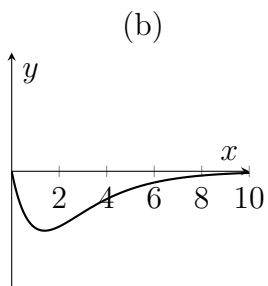
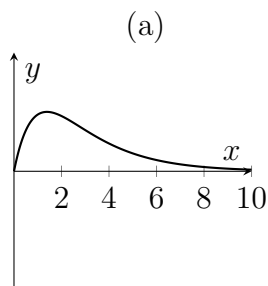
(c) $1 + 3 \sin^4 \alpha + 2 \sin^6 \alpha$,

(d) $1 - 3 \sin^4 \alpha + 2 \sin^6 \alpha$,

(e) $1 + 8 \sin^6 \alpha$.

Please turn over

B. Which of the following graphs is a sketch of $e^{-x/2} - e^{-x}$ for $x > 0$?



Please turn over

C. For precisely which non-zero real values of x is it true that

$$x^2 - 3x + 2 < \frac{x-1}{x} \quad ?$$

- (a) $x < 1 - \sqrt{2}$ or $x > 1 + \sqrt{2}$,
- (b) $1 - \sqrt{2} < x < 0$ or $1 < x < 1 + \sqrt{2}$,
- (c) $1 < x < 1 + \sqrt{2}$,
- (d) $1 - \sqrt{2} < x < 1 + \sqrt{2}$,
- (e) $1 - \sqrt{2} < x < 0$.

Please turn over

D. Consider the two inequalities

$$1 \leq x^2 + y^2 \leq 4 \quad \text{and} \quad x^2 \geq 3y^2.$$

The **total** area of all regions of the (x, y) -plane where **both** inequalities hold is

- (a) $\pi\sqrt{3}$,
- (b) π ,
- (c) 2π ,
- (d) $\frac{\pi}{2}$,
- (e) $\frac{\pi^2}{6}$.

Please turn over

E. The points $(0, 1)$ and (p, q) are on opposite ends of the diameter of circle C . The x -axis is a tangent to the circle C if and only if

(a) $p = 1 + q$,

(b) $pq = 1$,

(c) $p^2 = 4q$,

(d) $p^2 + (q - 1)^2 = 1$,

(e) $p + q = 1$.

Please turn over

F. The series

$$1 + (1 + x - x^2) + (1 + x - x^2)^2 + (1 + x - x^2)^3 + \dots$$

converges to $\frac{1}{x(x-1)}$ for precisely which real values of x ?

- (a) If and only if $-1 < x < 1$,
- (b) If and only if we have both $x \neq 0$ and $x \neq 1$,
- (c) If and only if either $-1 < x < 0$ or $1 < x < 2$,
- (d) If and only if either $-2 < x < -1$ or $0 < x < 1$,
- (e) For all real x .

Please turn over

G. Given that $y = f(x)$ is a solution to $\frac{dy}{dx} = y^{1/4}$, it follows that one of the following functions is a solution to $\frac{dy}{dx} = 2y^{1/4}$. Which one?

(a) $y = (2)^{-4}f(x)$,

(b) $y = (2)^3f(x)$,

(c) $y = (2)^{4/3}f(x)$,

(d) $y = (2)^{-3}f(x)$,

(e) $y = (2)^4f(x)$.

Please turn over

H. Suppose that a function $f(n)$ on the positive integers is defined such that $f(1) = 1$ and then for $n \geq 1$

$$f(2n) = f(n) \quad \text{and} \quad f(2n + 1) = f(n) + f(n + 1).$$

How many values of n are there such that $f(n) = 3$ and also n is a multiple of 35?

- (a) 0,
- (b) 1,
- (c) 2,
- (d) 3,
- (e) Infinitely many.

Please turn over

I. The number of positive solutions x to the equation

$$\log_2 x = \log_2(x + a) + b,$$

where a and b are non-zero real numbers, is

- (a) zero if $ab < 1$, or one if $ab > 1$,
- (b) one if $ab < 1$, or two if $ab > 1$,
- (c) one if $ab < 0$, or zero if $ab > 0$,
- (d) zero if $ab < 0$, or one if $ab > 0$,
- (e) one if $ab < 1$, or zero if $ab > 1$.

Please turn over

J. Given that $\int_1^2 \frac{x^2}{1+x^4} dx = A$ where A is some positive real number (which you should not attempt to determine), it follows that the value of $\int_1^2 \frac{x^{-2}}{1+x^4} dx$ is equal to

- (a) $1 - A$,
- (b) $-A$,
- (c) $\frac{1}{A}$,
- (d) $A - 1$,
- (e) $\frac{1}{2} - A$.

End of last question